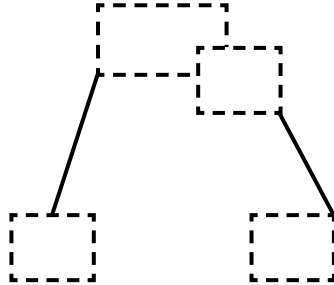
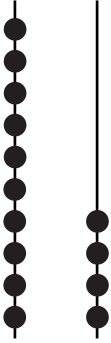




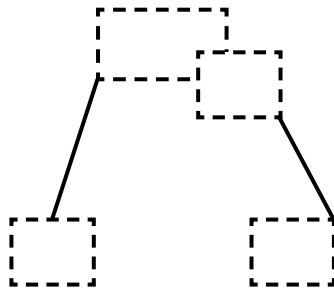
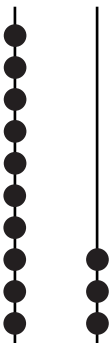
NAME \_\_\_\_\_ DATE \_\_\_\_\_

## COUNTING TENS AND ONES

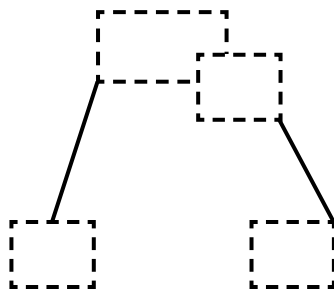
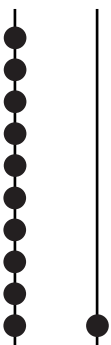
Use the hide zero cards and show total tens and ones. Write the number of tens and ones.



is the same as  
\_\_\_ ten and \_\_\_ ones.



is the same as  
\_\_\_ ten and \_\_\_ ones.



is the same as  
\_\_\_ ten and \_\_\_ ones.